



# Year 3 Workout: Maths

## Warm up

1. Fill in the missing numbers for these number bonds.

$15 + \dots = 20$

$20 - 8 = \dots$

$20 - 13 = \dots$

$6 + \dots = 20$

2 marks

2. Fill in the missing numbers using your times tables.

$25 = \dots \times 5$

$3 \times \dots = 21$

1 mark

3. Complete the tally chart by counting the flowers and bees.



	Tally	Total
Flowers		
Bees		

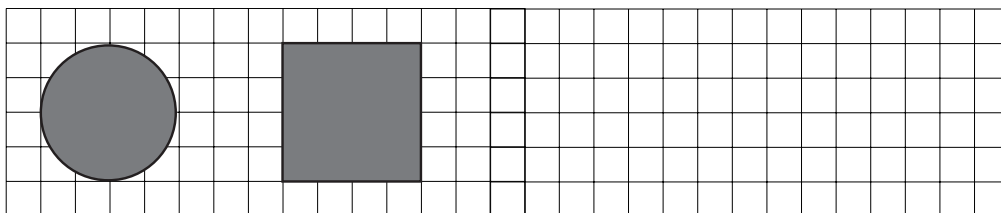
2 marks

4. There are **267** cows on a farm.  
Write this amount in **words**.

.....

1 mark

5. Draw each missing shape on the grid above its name.  
Use a ruler to help you.



Circle

Square

Rectangle

Triangle

2 marks

6. Complete these sums.

$$\begin{array}{r} 270 \\ + 140 \\ \hline \end{array}$$

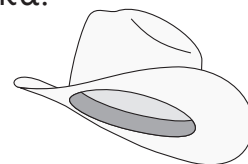
.....

$$\begin{array}{r} 508 \\ + 312 \\ \hline \end{array}$$

.....

2 marks

7. Lukas has 36 cowboy hats and Sofia has 18.  
They each give half of their cowboy hats to Mika.  
How many cowboy hats does Mika have?



..... cowboy hats

2 marks

**Score:**

Taken from CGP's Year 3 Maths 10-Minute Weekly Workouts (M3XW21).  
See the full range of KS2 Weekly Workouts at [cgpbooks.co.uk](http://cgpbooks.co.uk).

# Year 3 Maths Workout: Answers

1.  $15 + 5 = 20$                        $20 - 8 = 12$   
 $20 - 13 = 7$                           $6 + 14 = 20$

2 marks for all 4 correct,  
 otherwise 1 mark for any 2 correct

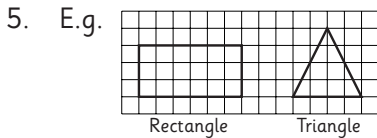
2.  $25 = 5 \times 5$       $3 \times 7 = 21$  1 mark

3.

	Tally	Total
Flowers		8
Bees		6

1 mark for each correct row

4. **Two hundred and sixty seven** 1 mark



1 mark for each correctly drawn shape

6. 
$$\begin{array}{r} 270 \\ + 140 \\ \hline 410 \end{array}$$
 1 mark     
$$\begin{array}{r} 508 \\ + 312 \\ \hline 820 \\ 1 \end{array}$$
 1 mark

7.  $36 \div 2 = 18$ .  $18 \div 2 = 9$ .  
 $18 + 9 = 27$  **cowboy hats**.  
 2 marks for the correct answer,  
 otherwise 1 mark for the correct working